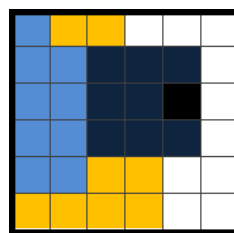


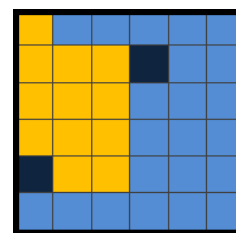
## Tabliczka mnożenia przez 2, 3, 4, 5 i 10

Rozwiąż zadania, a potem odzyskaj wyniki na planszy i zamaluj pola zgodnie z podanymi wzorami.

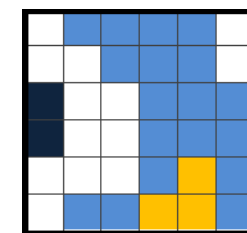
36	90	15	16	8
14	28	25	18	4
2	5	45	3	27
32	21	80	35	12
6	60	10	9	50
20	30	24	40	70



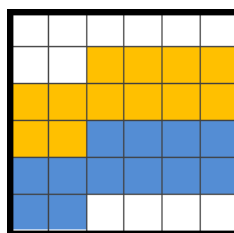
$$2 \cdot 2 =$$



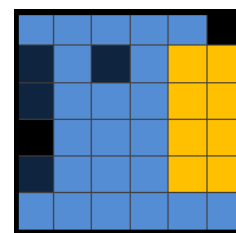
$$6 \cdot 10 =$$



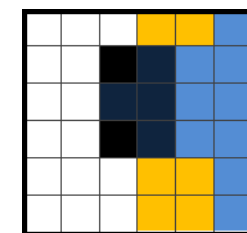
$$5 \cdot 5 =$$



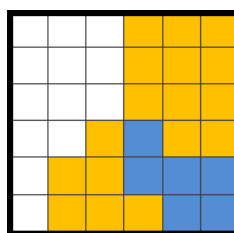
$$10 \cdot 9 =$$



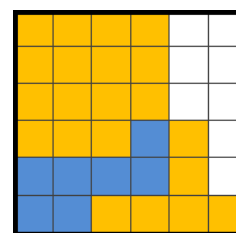
$$3 \cdot 3 =$$



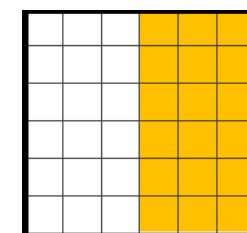
$$7 \cdot 2 =$$



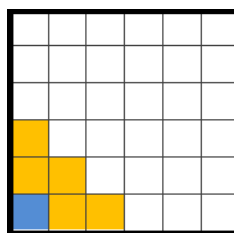
$$8 \cdot 4 =$$



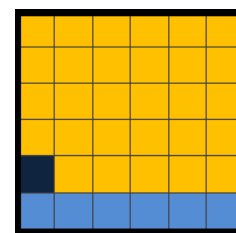
$$2 \cdot 6 =$$



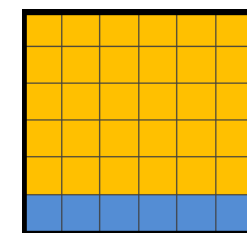
$$2 \cdot 1 =$$




$$4 \cdot 2 =$$



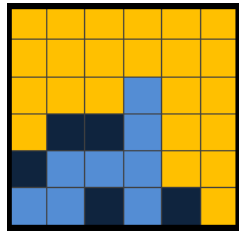
$$7 \cdot 3 =$$



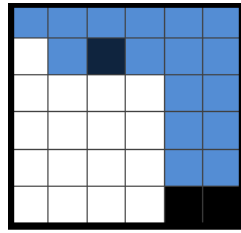
$$5 \cdot 7 =$$



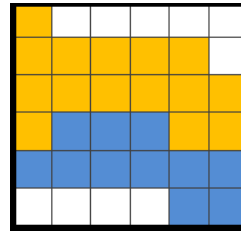
$4 \cdot 5 =$



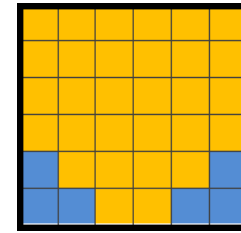
$5 \cdot 10 =$



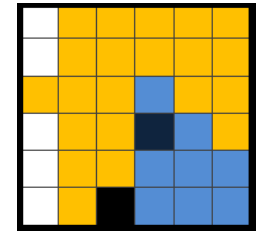
$3 \cdot 10 =$




$2 \cdot 8 =$



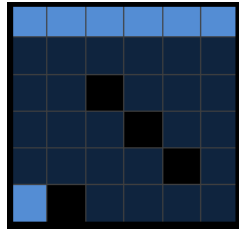
$5 \cdot 3 =$




$2 \cdot 3 =$



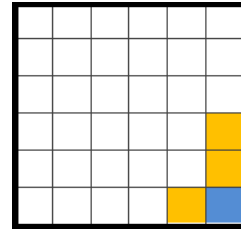
$7 \cdot 10 =$



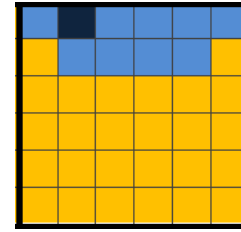
$5 \cdot 2 =$



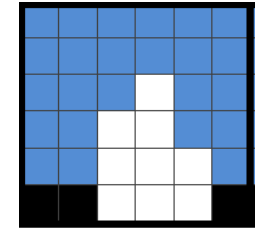
$4 \cdot 7 =$



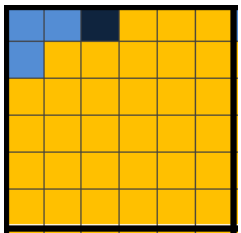
$4 \cdot 9 =$



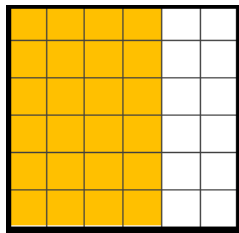
$3 \cdot 1 =$



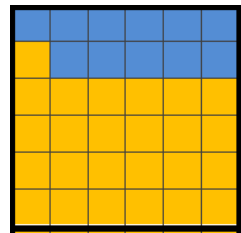
$3 \cdot 8 =$



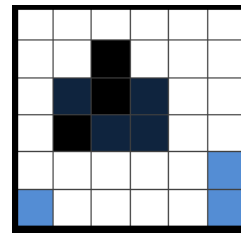
$9 \cdot 5 =$



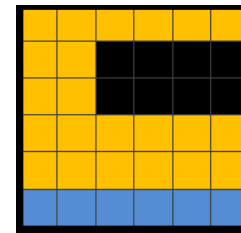
$9 \cdot 3 =$



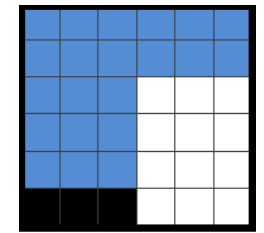
$1 \cdot 5 =$



$9 \cdot 2 =$



$10 \cdot 8 =$



$10 \cdot 4 =$

Rozwiązanie:

