



Ile czasu minęło?

Oblicz, ile minut minęło między podanymi godzinami.

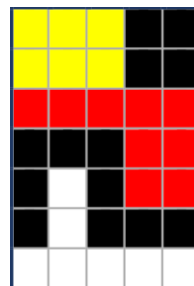
37	20	40	18
5	60	25	50
15	35	44	55
45	13	10	23




Między godz.
11.30 a 11.55




Między godz.
13.15 a 13.30



Między godz.
9.40 a 9.50




Między godz.
18.05 a 18.55



Między godz.
15.25 a 16.00




Między godz.
10.00 a 11.00




Między godz.
8.10 a 8.50




Między godz.
14.10 a 14.15




Między godz.
16.20 a 16.40




Między godz.
12.00 a 12.45




Między godz.
7.05 a 8.00




Między godz.
6.32 a 6.50



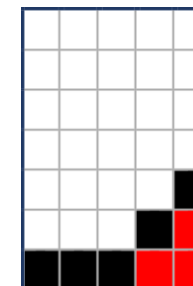
Między godz.
19.30 a 19.43



Między godz.
23.07 a 23.30



Między godz.
5.18 a 11.55



Między godz.
20.10 a 20.54

ZAPAMIĘTAJ:

1 godzina = 60 minut

ROZWIĄZANIE

